

EXTRA-ORDINARY MEASUREMENT ORGANIZATION (EMO)



CONTACT: 0756739235 anyosisye90@gmail.com

PRE-NECTA ASSESSMENT FOR STANDARD IV-2024

SUBJECT: ENGLISH LANGUAGE

TIME 1:30 Hrs.

NAME _____ DATE _____

INSTRUCTIONS:

- 1. This paper consists of 5 questions with 25 items**
- 2. Answer all questions.**
- 3. Follow the instructions provided in each section.**
- 4. Your work should be neat.**
- 5. Remember to write your full name and date.**

SECTION A: DICTATION

1. Listen carefully to the sentences read in (i) to (v) and then write them in the spaces provided.

i. _____

ii. _____

iii. _____

iv. _____

v. _____

MsomiBora.com

SECTION B: VOCABULARY

i. Find out the **odd** word from the words; train, bus, car and lorry

A. Bus B. Train C. Car D. Lorry

ii. A person who flies an aeroplane is called _____

A. Driver B. Commander C. Sailor D. Pilot

iii. Mr. Edward tests eyesight and sells spectacles, so he is called;

A. Doctor B. Detective C. Optician D. Chemist

iv. A person who looks after sick people is called _____

A. Doctor. B. Nurse. C. Teacher. D. Witch doctor

v. The young one of a pig is piglet as a calf to a _____

A. Cow. B. Lion. C. Duck. D. Horse

SECTION C: GRAMMAR AND TENSES

3. i. My uncle slaughtered _____ ewe yesterday.

A. The. B. a. C. An. D. Much

ii. The doctor says a cow's milk must be _____ before it is drunk.

A. boiled B. Boiling. C. Boil. D. Boils

iii. She cuts vegetables _____ a knife.

A. Are B. With. C. at D. For

iv. She went to the hospital _____ she was sick.

A. Because. B. Although. C. Also. D. If

v. The thief ran _____ the road.

A. Between B. Among C. Along. D. into

SECTION D: COMPOSITION

4. Arrange the following sentences in the correct order to make a good passage, give numbers letter A, B, C, D and E

i. I have my breakfast.

ii. After that, I put on my uniform.

iii. And finally, I go to school.

iv. And then, I take bath.

V. I wake up early in the morning and I brush my teeth.

SECTION E: COMPREHENSION

5. Read the passage carefully then answer the questions that follow.

Last Tuesday was a sport day at Hanna Benie Primary school. Many games were played on that day. Standard four pupils competed with standard five pupils. Nyamwiza and Chikola were in standard four. Masalu and Tatu were in standard five. All pupils ran the 100 meters. The competition started at 10 O' clock in the morning. Many pupils wanted to know who would win the race.

The pupils were singing and dancing. Nyamwiza ran very faster than others. Standard four pupils were cheering, Nyamwiza! Nyamwiza! Nyamwiza!. Nyamwiza was the first to reach the finishing line. Tatu was the second and Masalu was the third. Standard four pupils won. They were very happy.

QUESTIONS;

i. When did the competition begin? _____

ii. Who finished the last in the competition? _____

iii. Which class won the competition? _____

iv. What made Nyamwiza finishing the first? _____

V. How many meters did they run? _____(Your answer should be in words)

EXTRA-ORDINARY MEASUREMENT ORGANIZATION (EMO)



CONTACT: 0756739235 anyosisye90@gmail.com

PRE-NECTA ASSESSMENT FOR STANDARD IV-2024

SUBJECT: SCIENCE AND TECHNOLOGY

PUPIL'S NAME: _____

SCHOOL NAME: _____

TIME: 1:30 HOURS

DATE: _____

INSTRUCTIONS

1. This paper consists of five (5) questions with 25 questions.
2. Answer all questions basing on instructions given in each question
3. All answers must be written in black or blue ink pen
4. Mobile phones and unauthorized material are not allowed in the assessment room
5. Remember to write your name in the space provided

1. Choose the correct answer and write its letter in the space provided.

i. The academic teacher at Hanna Benne primary school wants to change the system of keeping pupil's attendance records from the manual attendance book to the electronic system. Which electronic machine would him to use?

- A. Television B. Computer
C. Decoder D. System unit

ii. Which instrument among the following is used to measure temperature?

- A. Beam balance B. Spring balance
C. Thermometer D. Breaker

iii. Locomotion is the ability to move from one place to another. What do we call the ability of living organisms to form new organisms of their own kind?

- A. Reproduction B. Growth

MsomiBora.com

C. Respiration D. Excretion

iv. Mwinyi is a class two pupil, he wakes up early in the morning. Which action does he do after waking up?

A. Brushing shoes B. Eating breakfast C. Brushing teeth D. Getting bath

v. Teacher Suzy came to our class with a chart written sunlight, water, chlorophyll and carbon dioxide. What had she prepared to teach?

A. Source of light B. Uses of sounds

C. Types of magnet D. Photosynthesis

2. Answer items i-v by matching the items in list A with those of list B

LIST A	ANSWER	LIST B
i. Carries chewed food from mouth to the stomach		a) Immunity b) Anus c) large intestine
ii. Ability of the body to resist against diseases		d) Large intestine e) Hypothesis formulation
iii. Digests and absorbs food nutrients		f) Problem identification g) Oesophagus
iv. Removes undigested food substances out of the body		
v. The second stage in scientific experiment		

3. Complete the following sentences by choosing words from the box provided.

Body protection, kill germs, Kidatu, Ruler, Pulley, Land, energy, air

- i. Drawing water from underground well needs a _____
- ii. After sweeping the compound, Ashura decided to burn the rubbish. This action causes _____ pollution.
- iii. It produces hydroelectric power in our country _____
- iv. It is advisable to eat fruits and vegetables in right amount for _____
- v. Our science teacher wanted to get the length of a science text book. Which was the best scientific device to use? _____

4. Re-arrange the following steps of rendering a first aid to a fainted person by giving the letters A, B, C, D and E.

i. Take the victim to a cool place to get fresh air.

ii. Lay the victim safely with his or her head lower but facing upward than the leg.

iii. If the victim continues to breathe difficulty arrange transport to a nearby hospital or health center for medical care.

iv. Loose shoes, belt and any tight cloth to make the body relax.

v. Check the breathing actions of the victim.

5. Carefully study the pictures below then answer the questions that follow.



QUESTIONS:

i. Which property of light is investigated in picture A? _____

ii. Which property of light is investigated in picture B? _____

iii. What was formed as the result of the investigated property of light as it has been shown in picture A? _____

iv. What kind of energy is demonstrated from pictures above?

v. Apart from the kind of energy shown in the picture above, mention any two kinds of energy you know.

a) _____

b) _____

EXTRA-ORDINARY MEASUREMENT ORGANIZATION (EMO)



CONTACT: 0756739235 anyosisye90@gmail.com

PRE-NECTA ASSESSMENT FOR STANDARD IV-2024

SUBJECT: CIVIC AND MORAL EDUCATION

PUPIL'S NAME: _____

SCHOOL NAME: _____

TIME:1:30 HOURS

DATE: _____

INSTRUCTIONS:

This paper consists 25 questions

Answer all questions.

Follow the instructions provided in each section.

Your work should be neat

Remember to write your full name and date

MULTIPLE CHOICE

Answer questions I – V by choosing the letter of the correct answer and write its letter in the space provided

i. Which one of the following things does **NOT** identify a particular school?

(A). School motto (B). Attractive classrooms []

(C). School boundaries (D). School uniforms

ii. How do we get different prefects at school?

(A). They are appointed by teachers (B). They are elected by class monitors

(C). They are elected by parents (D). They are elected by pupils []

iii. Which of the following acts shows that a pupil obeys school rules? []

- (A). Paying school fees on time (B). Not performing school chores
(C). Arriving at school punctually (D). Preparing class academic timetable

iv. Tanzania was formed after the union of Tanganyika and Zanzibar. The two countries were united by:

- (A). John Okello and Sheikh Abeid Amani Karume
(B). Mwl. Julius K. Nyerere and Sheikh Abeid Amani Karume
(C). Rashid Mfaume Kawawa and Mwl. Julius K. Nyerere
(D). Sheikh Abeid Amani Karume and Rashid Mfaume Kawawa []

v. The following are the acts of being honest **EXCEPT:**

- (A). Disclosing secrets of other people (B). Keeping promises []
(C). Taking good care of assets (D). Telling the truth

2. Match the items of LIST A with their corresponding responses from LIST B by writing the letter of the correct answer in the brackets provided

LIST A	ANSWERS	LIST B
i. Coat of Arms	<input type="text"/>	A. An elephant
ii. National flag	<input type="text"/>	B. Carries national motto
iii. Uhuru torch	<input type="text"/>	C. A giraffe
iv. National animal	<input type="text"/>	D. Shows independence of our nation E. Shows peace, love and hope to Tanzanians F. It is lowered at 12:00 P.M

3.Fill in the gaps by choosing the correct words from the brackets

i. The act of telling someone his or her weaknesses is referred to as _____

(Accepting/ Criticizing / Complaining)

ii.A condition that makes it difficult for someone to do things that other people can do is known as _____ **(Challenge / Disability / Stammer)**

iii. Tanzania’s nearest neighboring country to the southern part is _____

(Mozambique / Kenya / South Africa)

iv. Who is responsible to protect resources of the family? _____

(All parents / All family members / all villagers)


SECTION B:

4. Answer the following questions by putting a tick (√) in the box to indicate the statement which shows good moral or bad moral

No.	STATEMENT	GOOD MORAL	BAD MORAL
i.	An adult teaches children the effects of hypocrisy		
ii.	An pupil serves a lot of food that she cannot finish		
iii.	A child deceives her mother about the money she used to		

	buy sweets		
iv.	Leaders prohibit citizens to urinate in the water sources		

5. Study the following picture and then answer the questions that follow:



Questions:

- i. Which activity taking place on the above picture? _____
- ii. The opportunity to choose their own leaders through free and fair election is called _____
- iii. The method of getting leaders which people practice from the above picture is called _____
- iv. The general election in Tanzania takes place after every _____ years.

6. Read the following passage and then answer the questions that follows:

Kaminyoge is nine years old. He is my classmate. We are in standard four this year. He does not do well in his studies. Last week, the Head teacher announced that on 1 May this year will be a public holiday. Kaminyoge was very excited to hear that. He knows that on public holidays we never come to school. He dislikes coming to school. After the Head teacher's announcement, Kaminyoge came to ask me some questions. He wanted to know other public holidays that were going to take place in the near future.

I told him all that I know. I started with that of 7th July. He didn't know what was that public holiday about. I explained to him that it is an international Trade Exhibition Day. It is called Sabasaba Day, when people go to see and buy commodities produced within and outside our country. It is normally conducted at Mwalimu Nyerere grounds along Kilwa Road in Dar es Salaam. I also mentioned the public holiday that takes place on 8 August every year. I explained to him that it is called Peasant Da. On this day, peasants and farmers celebrate by showing their products. After our discussion we dispersed and every one of us too his way home.

QUESTIONS

i. How many public holidays have been mentioned in the passage above?

ii. When do we celebrate farmers' day in our country? _____

iii. Which public holiday did the Head teacher announce? _____

iv. Sabasaba Day takes place on _____ every year.

EXTRA-ORDINARY MEASUREMENT ORGANIZATION (EMO)



CONTACT: 0756739235 anyosisye90@gmail.com

MTIHANI WA UTAMILIFU WA MUHULA WA PILI

SOMO: KISWAHILI

JINA LA MWANAFUNZI: _____

JINA LA SHULE: _____

MUDA: SAA 1:30

TAREHE: _____

MAELEKEZO

1. Mtihani huu una jumla ya maswali 5 yenye vipengele 25
2. Jibu maswali yote kwa kufuata maelekezo katika kila sehemu
3. Hakikisha kazi yako iko nadhifu.
4. Kumbuka kuandika jina lako kamili kwa herufi kubwa.

SEHEMU A: IMLA

Sikiliza kwa makini sentensi zinazosomwa kisha uziandike kwa usahihi

- i) _____
- ii) _____
- iii) _____
- iv) _____
- v) _____

SEHEMU B: SARUFI NA MISAMIATI

2. Chagua herufi ya jibu sahihi

i. Kinyume cha neno **zawadi** ni _____

- A) Ruhusa B) Vichekesho C) Tunu D) Adhabu []

ii. Mtu anayeweka hesabu ya fedha huitwa _____

A) Mhandisi B) Mhasibu C) Mhariri D) Mwandishi []

iii. Mtoto wa kuku ni **kifaranga**, je mtoto wa **tembo** huitwa nani? _____

A) Jana B) Ndege C) Ndama D) Kidanga []

iv. Kisawe cha neno **Tunu** ni _____

A) Chereko B) Furaha C) adhabu D) zawadi []

v. Mahali ambapo viongozi au wasanii husimama kutoa hotuba au burudani huitwa _____

A) Shuleni B) kizimbani C) jukwaa D) barazani []

SEHEMU C: LUGHA YA FASIHI

3. Jaza majibu yaliyoachwa wazi

i. Tegua kitendawili hiki " **wakikua mama yao huwatupa mbali kwa kishindo**

ii. Nini maana ya nahau **Ana mkono wa birika?** _____

iii. Methali inayohimiza watu kufanya kazi kwa bidii ni ipi?

iv. Tega kitendawili chenye jibu la **chupa**.

SEHEMU D: UTUNGAJI

4. Kamilisha nafasi zilizo wazi kwenye barua kwa kuchagua majibu sahihi uliyopewa kwenye kisanduku

Shule ya msingi Mwembe,

(i)_____,

Songwe.

(ii)_____.

Mpendwa Mama shikamoo.

Ni imani yangu kuwa unaendelea vizuri na shughuli za kilimo. Naamini pia ndugu zangu wengine hawajambo hapo nyumbani.

(iii)_____ ya barua hii ni kutaka kukujulisha kuwa nimefaulu upimaji wa kitaifa wa darasa la nne tuliofanya mwishoni mwa mwaka jana. Nimefurahi sana kwa kuwa nimefaulu vizuri kwa kupata Daraja A. Ni matumaini yangu hata mdogo wangu furaha atafaulu upimaji wake wa Darasa la Nne wa mwaka (iv)_____.

Ninakushukuru kwa kunihimiza kusoma kwa bidii. kufaulu kwangu kumetokana na maneno ya hamasa.

Kwa leo sina mengi zaidi. Ninaomba uwasalimie wadogo zangu wote.

Ni mimi mwanao (v) _____

SEHEMU E: UFAHAMU

5. Soma shairi kisha jibu maswali yanayofuata.

Watoto tunayo haki, kupata elimu bora,
Wala msitudhihaki, na kutuchapa bakora,
Hatutaki mafataki, haki zetu kuzipora,

Watoto tunasimama, Kuzilinda haki zetu.

Tamati nimefikia, mengi nimeyagusia,
Yale niliyowaambia, yafaa kuzingatia,
Atakayepuuzia, atakuja kujutia,

Watoto tunasimama, kuzilinda haki zetu.

Maswali

- i. Shairi hili lina beti ngapi? _____
- ii. Shairi hili lina jumla ya mizani mingapi? _____
- iii. Watoto wana haki ya kupata elimu kama shairi linavyosema. Ni haki gani nyingine ambayo watoto wanahaki ya kupata? _____
- iv. Nini maana ya neno tamati kama lilivyotumika kwenye shairi? _____
- v. Andika kituo cha shairi hili _____

EXTRA-ORDINARY MEASUREMENT ORGANIZATION (EMO)



CONTACT: 0756739235 anyosisye90@gmail.com

PRE-NECTA ASSESSMENT FOR STANDARD IV-2024

SUBJECT: SOCIAL STUDIES

PUPIL'S NAME: _____

SCHOOL NAME: _____

TIME:1:30 HOURS

DATE: _____

INSTRUCTIONS

- This paper consists of 4 questions in sections A and B with total of 25 items.
- Answer all questions as per instructions given in each section.

SECTION A: (28 MARKS)

1. Answer items (i) – (viii) by choosing the letter of the correct answer and write it in the box provided.

i. Which of the following is **NOT** an advantage of rainfall?

- A. Growth of plants
B. It leads to floods
C. It adds water to the water bodies
D. It brings water for various uses

ii. The main production activities taking place in urban areas are _____

- A. Farming, fishing and tourism
B. Pastoralism, fishing and farming
C. Trade, fishing and farming
D. Trade, transport and industries

iii. Which instrument is used to measure humidity? _____

- A. Thermometer
B. Hygrometer
C. Barometer
D. Anemometer

iv. Mr. Kaiza lives with his wife and their three children only. What type of family is this?

- A. Extended family
B. Nuclear family
C. Couple family
D. Single parent family

v. Who was the fourth president of Tanzania? _____

- A. Benjamin W. Mkapa
B. Dr. John Pombe Magufuli
C. Jakaya Mrisho Kikwete
D. Ali Hassani Mwinyi

vi. The following were forms of feudalism which existed in Tangayika, **EXCEPT**

- A. Ubugabire
B. Communalism
C. Umwinyi
D. Nyarubanja

vii. Mtemi Isike was the leader of which tribe among the following? _____
 A. Nyamwezi C. Hehe
 B. Yao D. Zigua

viii. The areas along the road which have been left for the purpose of road expansion are termed as _____.
 A. Game reserves C. Infrastructure
 B. Road reserves D. National parks

2. Match the items in LIST A with those in LIST B by writing the letter of the correct answer in the brackets

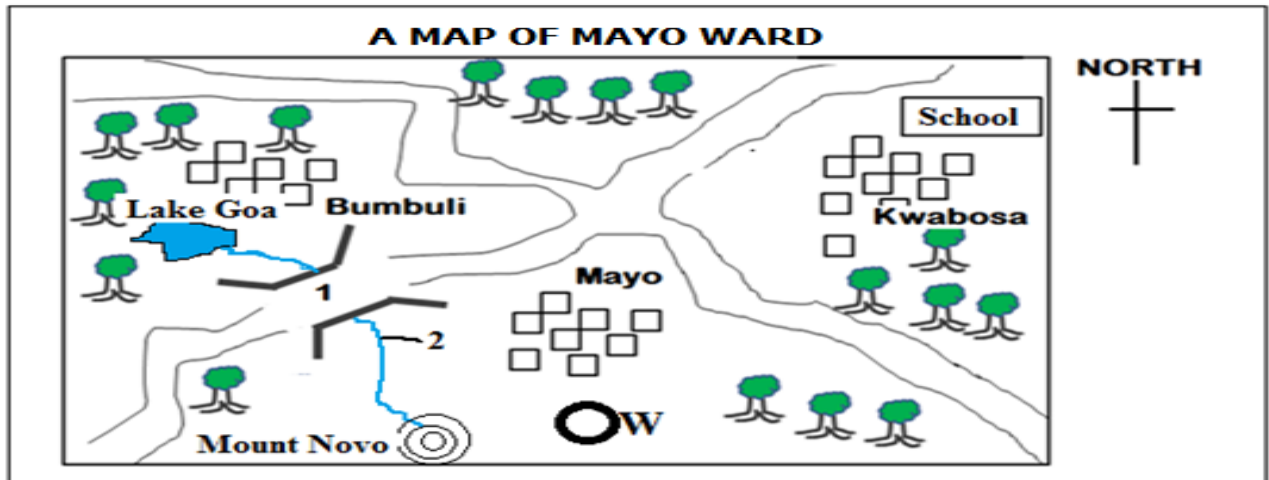
LIST A	ANSWERS	LIST B
i. The planet on which we live	()	A. Jupiter
ii. The hottest planet in the solar system	()	B. Earth
iii. The largest planet in the solar system	()	C. Neptune
iv. The smallest planet in the solar system	()	D. Venus
v. The farthest planet from the sun	()	E. Mercury
vi. The planet which has a ring around it	()	F. Sun
		G. Neptune
		H. Saturn

SECTION B : (22 MARKS)

3. Answer the items (i)-(vii) by writing the correct answers in the space provided.

- i. The valuable things that can bring wealth to a person, family or a nation are known as _____
- ii. The condition of coldness or hotness of an object or a place is measured by _____
- iii. Normally the moon has no natural light but it reflects light from the _____
- iv. An act of entering a place without being welcomed is termed as _____
- v. A place where the elements of weather are measured and recorded is known as _____
- vi. The atmospheric condition of a place observed for a long period of time is called _____
- vii. The hardest mineral that is used in making ornaments, cutting glasses and breaking rocks is known as _____

4. Study carefully a map of Mayo Ward below and answer the items (i)-(iv) by writing the correct answers in the space provided.



Questions

- i. What is the direction of Kwabosa from Bumbuli?

- ii. What is the direction of school from Kwabosa?

- iii. The river marked by number 2 starts at _____ and pours its water into _____
- iv. Apart from river and lake, name other source of water that is shown on the map above

EXTRA-ORDINARY MEASUREMENT ORGANIZATION (EMO)



CONTACT: 0756739235 anyosisye90@gmail.com

PRE-NECTA ASSESSMENT FOR STANDARD IV-2024

SUBJECT: MATHEMATICS

PUPIL'S NAME: _____

SCHOOL NAME: _____


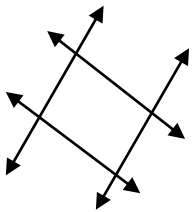
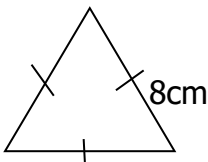
TIME: 1:30 HOURS







DATE: _____





INSTRUCTIONS:

- 1. This paper consists 5 questions with 25 items.**
- 2. Answer all questions.**
- 3. Follow the instructions provided in each section.**
- 4. Your work should be neat**
- 5. Remember to write your full name and date**

NO.	QUESTION	WORKING SPACE	ANSWER
1.	(i) During meeting Simba fans were (nineteen thousand four hundred and forty) write the number of fans in figure.		
	(ii) Number of pupils from school A was as follows $800+6+8000+70$. How many pupils were there in a school A		
	(iii) My mother told me that, she has XLIV years. What is the age of mother in Hindu Arabic?		
	(iv) The number of pupils from Magufuli secondary school are 18452, what this number in long form?		
	(v) What is the total value of eight in		

	"Thirteen thousand one hundred and eight"												
2.	(i) During meal time, Jack ate $\frac{3}{4}$ of the food while Ruth ate the rest. What fraction of food did Ruth eat?												
	(ii) From the figure below which fraction was not shaded 												
	(iii) Mwalusaja divided a pawpaw into ten equal pieces what was the fraction of each pieces?												
	(iv) A half of a number is 15. What that number?												
	(v) Three quarters of pupils performed well in mathematics. What this performance in figure?												
3.	(i) <table style="margin-left: 20px; border-collapse: collapse;"> <tr> <td style="padding-right: 20px;">hr</td> <td>min</td> </tr> <tr> <td style="padding-right: 20px;">1 5</td> <td>5 8</td> </tr> <tr> <td style="padding-right: 20px;">+2 5</td> <td>2 2</td> </tr> <tr> <td colspan="2" style="border-top: 1px solid black; padding-top: 2px;"></td> </tr> <tr> <td colspan="2" style="border-top: 1px solid black; padding-top: 2px;"></td> </tr> </table>	hr	min	1 5	5 8	+2 5	2 2						
hr	min												
1 5	5 8												
+2 5	2 2												
	(ii) how many lines are in the diagram below 												
	(iii) what is the name of polygon figure which has six sides												
	(iv) Find the perimeter of the figure below 												
	(v) Which is heavier between 22kg of flower												

	and 17000gm of stones								
4	(i) The distance between mosh and Kampala is 5652 km if a bus travelled from Moshi to Kampala and back what is the distance of a round trip?								
	(ii) The national stadium has 63240 seats colored in orange and blue. If the orange seats are 44612 how many seats are colored blue?								
	(iii) Multiply 143 by 10								
	(iv) $872 \div 4 =$								
	(v) How many buckets of capacity 11 litres will completely fill a tank of 99 litres?								
5.	The number of apples sold to pupils at the school shop every day is represented in the table below								
	<table border="1"> <thead> <tr> <th>DAY</th> <th>APPLE SOLD</th> </tr> </thead> <tbody> <tr> <td>Monday</td> <td></td> </tr> <tr> <td>Tuesday</td> <td></td> </tr> </tbody> </table>	DAY	APPLE SOLD	Monday		Tuesday			
DAY	APPLE SOLD								
Monday									
Tuesday									

	Wednesday			
	Thursday			
	Friday			
	Key  = represent 8 apples			
	QUESTION			
	(i) How many apples were bought in the whole week?			
	(ii) How many apples were bought on Friday?			
	(iii) Which days number of apples were balanced?			
	(iv) Which day pupils ate more?			
	(v) How many apples are in Wednesday and Friday altogether			

EXTRA-ORDINARY MEASUREMENT ORGANIZATION (EMO)

ENGLISH LANGUAGE -DICTATION

- i. I am in standard four this year.
- ii. Where were you yesterday?
- iii. Peter picked a piece of paper.
- iv. Mangoes, oranges and papaws are fruits.
- v. Time the time before the times you.

KISWAHILI-IMLA

- i. Mwalimu amewapa wanafunzi adhabu.
- ii. Tumelima bustani ya mbogamboga.
- iii. Vitabu vyote vimewekwa shaghalabaghala.
- iv. Sisi tumekula ugali wote.
- v. Tulikunywa chai ya maziwa jana.